

Bharat Talent Search Exam 2026

Std. : 3rd

Medium - English

Questions : 75

Time : 2 Hrs.

Subject : Language, Maths, EVS, Logical Thinking

Marks : 150

Section A

- Q.1 Which of these is a collective noun for a group of birds?
1) Pack 2) Group 3) Bunch 4) flock
- Q.2 Where do animals live?
1) Only on land 2) Only in water
3) On land, in water, and in the sky 4) Only in the sky
- Q.3 What is the feminine form of 'Elephant'?
1) Tigress 2) Cows 3) Lioness 4) Cow
- Q.4 Which word means 'interesting' in the sentence 'They also make the world a more interesting and beautiful place to live in'?
1) Boring 2) Amazing 3) Balanced 4) Awake
- Q.5 We waited for _ hour to see the tiger come out of the cave.
1) an 2) a 3) the 4) no article
- Q.6 1 Week : 7 Days :: 1 Year : ?
1) 364 Days 2) 52 Weeks 3) 12 Months 4) 366 Days
- Q.7 In which month is Teachers' Day celebrated?
1) August 2) October 3) January 4) September
- Q.8 Select the correct number to replace the question mark:
2, 2, 4, 12, 48, ?
1) 192 2) 240 3) 136 4) 208
- Q.9 2 Days : ? Hours
1) 24 2) 36 3) 48 4) 72
- Q.10 Who comes to help extinguish the fire when a fire breaks out?
1) Doctor 2) Police 3) Fire Station 4) Soldier
- Q.11 Identify the incorrect pair.
1) Suryamal - Chhatrapati Sambhajinagar 2) Matheran - Raigad
3) Yedshi - Yavatmal 4) Panhala - Kolhapur
- Q.12 Where is a free vaccine given if a dog bites?
1) Government Hospital 2) Private Hospitals
3) Semi-government 4) None of these

- Q.13 and are the two newly established Police Commissionerates in Maharashtra.
1) Pimpri Chinchwad, Talegaon Dhamdhare 2) Ahilyanagar, Dharashiv
3) Pimpri Chinchwad, Vasai Virar 4) Vasai Virar, Ambarnath
- Q.14 Complete the series: 4, 9, 14, 19, 24, ...?
1) 28 2) 26 3) 27 4) 29
- Q.15 Basundi is sweeter than Laddu. Jalebi is sweeter than Basundi, then which is the sweetest item?
1) Basundi 2) Jalebi 3) Laddu 4) None of these

Section B

- Q.16 What is the adjective in this sentence? "The old man walked slowly."
1) Man 2) Walked 3) Slowly 4) Old
- Q.17 How do you write 'we have' using an apostrophe?
1) We've 2) We'v 3) Wehav' 4) Weh've
- Q.18 The timid rabbit was afraid to leave its hole, but the bold mongoose ran straight at the snake."The words timid and bold are adjectives that are:
1) Synonyms (They mean the same thing)
2) Antonyms (They mean opposite things)
3) Rhyming words (They sound the same)
4) Verbs (Action words)
- Q.19 What do you use to protect your eyes from the sun?
1) Sunglasses 2) Gloves 3) Scarf 4) Socks
- Q.20 A gardener says: "These are not the plants belonging to Raju."Which sentence uses the apostrophe correctly?
1) These are not Raju Plants. 2) These are not Raju's plants.
3) These are not Rajus' plants. 4) These are not Raju' plants.
- Q.21 Make the smallest four-digit number using the digits 2, 9, 8, 0 only once.
1) 0298 2) 9820 3) 2089 4) 2890
- Q.22 Write the number in figures: "Seven thousand sixty-eight"
1) 700068 2) 768 3) 7068 4) 70068
- Q.23 What is the difference between the number of angles in a triangle and a rectangle?
1) More by 1 2) More by 2 3) Less by 1 4) Less by 2
- Q.24 A cricket match started at quarter to eleven in the morning and ended at half-past two in the afternoon. How long did the match last?
1) Two and a half hours 2) Quarter to four hours (3 hours 45 min)
3) Quarter to three hours 4) Three and a half hours

- Q.25 Select the smallest three-digit number from the options.
 1) 101 2) 998 3) 100 4) 245
- Q.26 By which organ from the options will you identify that 'Mango is sweet'?
 1) By nose 2) By tongue
 3) By skin 4) Options 1 and 2 are correct
- Q.27 What is the front part of the neck called?
 1) Mouth 2) Chin 3) Neck 4) Throat
- Q.28 Snake : Earthworm :: Frog : ?
 1) Tortoise 2) Crow 3) Cow 4) Tiger
- Q.29 In a row, 'A' is 15th from the left and 'B' is 20th from the right. If they swap places, 'A' becomes 25th from the left. Then, How many children are in the row?
 1) 43 2) 44 3) 45 4) 35
- Q.30 In a certain code language, if A = 1, B = 2, C = 3, and so on, and the word 'NET' is written as 39, then how will you write the word 'TEN'?'
 1) 35 2) 49 3) 39 4) 29

Section C

Instruction for Q.31 and Q. 32 - Read the passage and answer following question.

Talking to friends and family is fun! We do this in many ways. Talking face-to-face is the oldest way, where we see each other and hear each other's voices. We can also use a phone to chat with someone far away. Letters, with pretty stamps, take a while to arrive but carry a special message.

Now things get exciting! We can send pictures and messages instantly through our phones and computers. These are called texts and emails. Video calls let us see and talk to people at the same time, no matter the distance! So many ways to stay connected, all thanks to communication!

- Q.31 What is the oldest way of talking to someone mentioned in the passage?
 1) Phone calls 2) Texting 3) Face-to-face talking 4) Video calls
- Q.32 The word 'instantly' in the passage means:
 1) Very slowly 2) In a little while 3) Right away 4) All at once
- Q.33 Read the sentence and find the correct verb. The roots of the plantwater from the soil.
 1) drinks 2) drink 3) drank 4) drinking
- Q.34 Which phrase means 'to feel unwell'?
 1) Fit as a fiddle 2) On cloud nine 3) Under the weather 4) In seventh heaven
- Q.35 The bus late yesterday.
 1) is 2) are 3) was 4) were

- Q.36 $380 \div 4 = ?$
 1) 95 2) 85 3) 25 4) 94
- Q.37 Three hundred and fifty + One hundred and twenty-five = How much?
 1) Three hundred and seventy-five 2) Four hundred and fifty
 3) Four hundred and seventy-five 4) Six hundred
- Q.38 From 1 to 100, which digit does not appear 20 times?
 1) 1 2) 2 3) 3 4) 5
- Q.39 A sweet factory made 4560 Laddus. If filled in boxes of 24 each, some boxes are needed. If the box capacity is increased to 30 Laddus each, how many fewer boxes will be needed?
 1) 190 2) 38 3) 48 4) 152
- Q.40 Identify the incorrect statement from the following.
 1) Neem is bitter. 2) Jaggery is sweet.
 3) Ice cream is salty. 4) Amla (Indian Gooseberry) is astringent.
- Q.41 Which component is present in plant leaves?
 1) Algae 2) Chlorophyll 3) Fungus 4) None of these.
- Q.42 Which of the following items will you eat to maintain good health?
 1) Chocolate 2) Burger
 3) Pizza 4) Vegetable and Bhakri (Flatbread)
- Q.43 Which items are made from old clothes?
 1) Decorative items 2) Toys 3) Doormats 4) Options 1, 2 and 3
- Q.44 Sita is 5 years younger than Pranav. 5 years ago, Pranav was 21 years old. What will be the difference between their ages after 7 years?
 1) 15 2) 92 3) 5 4) 26
- Q.45 The sum of a mother and daughter's current age is 50 years. 5 years ago, the mother's age was 4 times the daughter's age. What is the daughter's current age?
 1) 10 2) 13 3) 15 4) 8

Section D

- Q.46 Fill in the blank:
 '..... they know the answer?'
 1) Do 2) Does 3) Did 4) Doing
- Q.47 Which statement best describes the role of a savings account for a student?
 1) It is a place to store money and learn financial responsibility
 2) It is a place to borrow money without returning it
 3) It is a place to hide money from your parents
 4) It is a place where money loses its value

- Q.48 Why do we go to school?
 1) To get medicine
 2) To learn new things and play with friends
 3) To buy groceries
 4) To make village decisions
- Q.49 Children listened to the story
- 1) patiently 2) neatly 3) brightly 4) slowly
- Q.50 If two chocolates cost 1 Rupee, how many chocolates will you get for 10 Rupees?
 1) 10 2) 20 3) 5 4) 15
- Q.51 Ram wants to bring 10 Liters of water. Which drum should he take?
 1) 5 Liter drum 2) 7 Liter drum 3) 15 Liter drum 4) 9 Liter drum
- Q.52 In 1 Quintal of grain, 1.5 kg was spoiled. How much good grain remains?
 1) 97.5 kg 2) 98.5 kg 3) 99.5 kg 4) 98 kg
- Q.53 A bundle of 50 Rupee notes has serial numbers from 42315 to 42364. What is the total amount in the bundle?
 1) 2450 Rupees 2) 2500 Rupees 3) 2400 Rupees 4) 2550 Rupees
- Q.54 How many odd numbers are there from 1 to 100?
 1) 100 2) 25 3) 15 4) 50
- Q.55 Which of the following is not the name of a newspaper?
 1) Maharashtra Times 2) Sakal 3) Lokmat 4) Gammat Jammatt
- Q.56 Using which of the following means of communication can we contact many people at the same time, but cannot see the face of the other person?
 1) Mobile Phone (Video Call) 2) Television
 3) Radio (Akashvani) 4) Artificial Satellite
- Q.57 Bandu's eyes are hurting, so what should Bandu do from the following?
 1) Should watch mobile.
 2) Should watch TV.
 3) Should play games on the computer.
 4) Should reduce the use of mobile, TV, and computer.
- Q.58 What primarily created the need for humans to build houses in one place, form a 'village', and live there?
 1) Due to the invention of the wheel
 2) Due to understanding the use of fire
 3) Due to the discovery of agriculture (farming)
 4) To make hunting easier
- Q.59 In the alphabet series if we count from the left there is a number of alphabet M. which alphabet will have the same number if we count from the right?
 1) F 2) G 3) E 4) M

Q.60 Which alphabet is 15 from the left?

1) L

2) M

3) O

4) K

Section E

Q.61 Identify the correct word for the blank:

She likes to eat with honey.

1) bred

2) Berad

3) Bread

4) Brad

Q.62 What is the correct past tense form of the verb in this sentence?

Rahul (watch) a documentary on the moon yesterday.

1) watches

2) watched

3) watching

4) watch

Q.63 I am looking keys of my vehicle. Have you seen it?

1) from

2) for

3) with

4) of

Q.64 Read the sentences carefully and choose the correct pair of words to fill in the blanks."The mysterious flying object landed silently on the grassy _____. It was round and glowing, so we knew it was not a _____."

1) plane, plain

2) plain, plain

3) plain, plane

4) plane, plane

Q.65 Select the sentence that is in present tense.

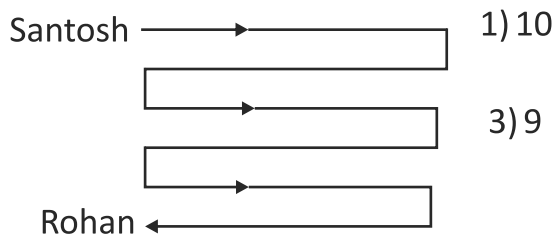
1) Sameer will look at the stars tomorrow night.

2) Sameer looked at the stars last night.

3) Sameer looks at the stars every night.

4) Sameer was looking at the stars.

Q.66 How many times does Santosh have to turn to reach Rohan? (Based on the visual path)



1) 10

2) 8

3) 9

4) 7

Q.67 $3 * 5$

$\times 7$

2765 Than * = ?

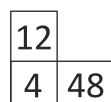
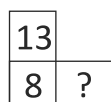
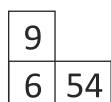
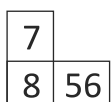
1) 8

2) 7

3) 6

4) 9

Q.68



1) 21

2) 100

3) 91

4) 104

- Q.69 The teacher drew a 'Square' and a 'Rectangle' on the board. The children counted the Lines of Symmetry. By how much are the square's lines of symmetry more than the rectangle's?
1) By 1 2) By 4 3) By 2 4) They are the same
- Q.70 Ishwari has 12 dozen bananas. She gave a quarter dozen to John, half a dozen to Akshara, and 48 bananas to Hina. Who will get the most bananas?
1) John 2) Hina 3) Akshara 4) Ishwari
- Q.71 Who proclaimed, 'Swaraj is my birthright and I shall have it.'?
1) Mahatma Gandhi 2) Bhagat Singh 3) Subhash Chandra Bose 4) Lokmanya Tilak
- Q.72 How many times a year does Zero Shadow Day occur?
1) 1 2) 2 3) 3 4) 4
- Q.73 Which vitamin do we get from the morning sunlight?
1) A 2) B 3) C 4) D
- Q.74 Radha walked 5 km north from her house. There she turned right and walked 3 km. Turning right again, she walked 5 km. Finally, she turned left and walked 2 km. So now, in which direction and at what distance is she from her house?
1) 5 km, East 2) 5 km, West 3) 3 km, North 4) 10 km, South
- Q.75 What should Purva do when her father is ill at home?
1) Watch TV. 2) Serve (take care of) her father.
3) Go to play. 4) Ask for money for snacks.

SPACE FOR ROUGH WORK

SPACE FOR ROUGH WORK